

## 【冀教版单元测试系列试卷】

一年级数学上册第五单元

智慧山育儿微信公众号



扫描微信扫描二维码关注公众号可持续获取小学阶段的学习资料和老师课程

## 冀教版一年级数学上册第五单元测验试题

题号	一	二	三	四	五	六	七	总分
分数								

### 一、算一算。




$$\begin{array}{l} 10-9= \\ 9-7= \\ 3+6= \\ 4+3= \end{array}$$

$$\begin{array}{l} 7-0= \\ 5+4= \\ 8-8= \\ 6-2= \end{array}$$

$$\begin{array}{l} 0+10= \\ 8-4= \\ 6+2= \\ 7+3= \end{array}$$

$$\begin{array}{l} 10-4= \\ 9-5= \\ 10-7= \\ 7-3= \end{array}$$

### 二、小猫的美餐在哪里?连一连。



### 三、你知道小鱼的后面藏的是几吗?

$6 + \text{fish} = 9$

$10 - \text{fish} = 4$

$\text{fish} + 4 = 9$

$\text{fish} - 8 = 2$

$10 = 8 + \text{fish}$

$7 - \text{fish} = 1$

$\text{fish} - 4 = 5$

$7 - \text{fish} = 2$

### 四、比一比。

$4+2 \bigcirc 7$

$3+7 \bigcirc 10$

$9-6 \bigcirc 4$

$6+1 \bigcirc 4+4$

$7-0 \bigcirc 0+7$

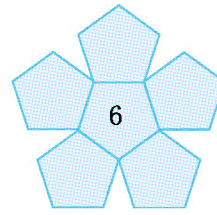
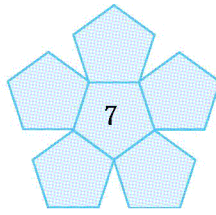
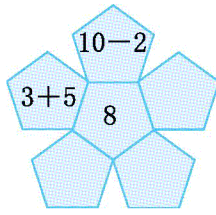
$7-5 \bigcirc 8-6$

$4+3 \bigcirc 10-2$


$10-3 \bigcirc 3$

$2+7 \bigcirc 5$

### 五、照样子,看得数写算式。



### 六、看图列式计算。




1.

$$\square \bigcirc \square = \square$$




2.

$$\square \bigcirc \square = \square$$




3.

$$\square \bigcirc \square = \square$$



4.

$$\square \bigcirc \square = \square$$




5.

$$\square \bigcirc \square = \square \quad \square \bigcirc \square = \square$$

$$\square \bigcirc \square = \square \quad \square \bigcirc \square = \square$$

### 七、数学与生活。

1. 草地上有 3 只熊猫在吃竹子,有 2 只熊猫在玩球,一共有多少只熊猫?




$$\square \bigcirc \square = \square$$

2. 贝贝练习射击,有 5 个气球,他射破了 1 个,还剩几个气球?



$$\square \bigcirc \square = \square$$

3. 小华家有 10 只小羊,从羊圈里跑出了 3 只,羊圈里还剩几只小羊?



$$\square \bigcirc \square = \square$$

4. 小红的右边有 3 人,左边有 4 人,这一排一共有多少人?

