

【冀教版单元测试系列试卷】

一年级数学上册第四单元

智慧山育儿微信公众号

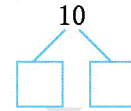

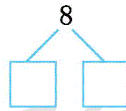

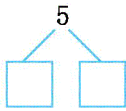



扫描微信扫描二维码关注公众号可持续获取小学阶段的学习资料和老师课程

冀教版一年级数学上册第四单元测验试题

题号	一	二	三	四	五	六	七	八	总分
分数									

一、看图写数。



二、填表。

7

4	↕
↕	1
↕	3
2	↕

8

7	↕
4	↕
↕	5
↕	1

9

4	↕
↕	5
3	↕
1	↕

10

↕	2
7	↕
↕	4
↕	9

三、在○里填上 ">" "<" 或 "="。

$10 \bigcirc 8$

$7 \bigcirc 8$

$6 \bigcirc 6$

$2 \bigcirc 9$

$1 \bigcirc 1$

$4 \bigcirc 0$

$4 \bigcirc 8$

$1 \bigcirc 0$

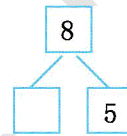
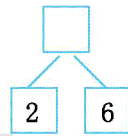
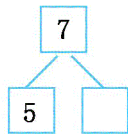
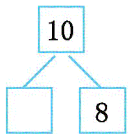
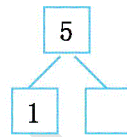
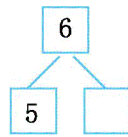
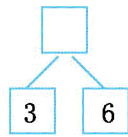
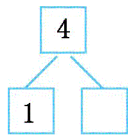
$0 \bigcirc 1$

$7 \bigcirc 7$

四、每朵花应该栽在哪个花盆里?用线连起来。

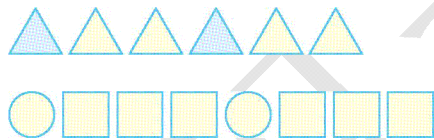


五、填一填。



六、画一画。

1.接着画满 10 个图形。



2.画满 9 个。



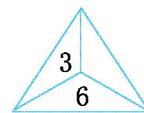
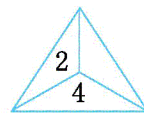
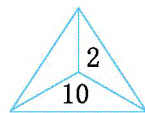
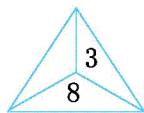
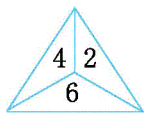
3.涂一涂,填一填。



(1)给右边的 2 个○涂上红色,给左边的第 2 个○涂上蓝色。


(2)一共有()个○,还剩下()个○没有涂上颜色。

七、照样子填数。



八、解决问题。

1.一共有 10 只小鸡,要分到两个盘子里吃米,一个盘子里分了 3 只,另一个盘子里分了几只?



2.有 9 片荷叶,小青蛙跳了 2 片,没跳的有几片?

